



CHAPTER 1 NUMBER SYSTEM

Natural Numbers: 1, 2, 3,

Whole Numbers: 0, 1, 2, 3,

Integers:, -3, -2, -1, 0, 1, 2, 3,

❖ Rational number

It is a number which can be expressed in the form of $\frac{p}{q}$ where p, q are integers and $q \neq 0$.

❖ Every natural number is a whole number, every whole number is an integer and every integer is a rational number.

❖ If a and b are two rational number such that $a < b$, then $\frac{a+b}{2}$ is a rational number lying between a and b .

❖ If $\frac{p}{q}$ and $\frac{r}{s}$ are any two rational numbers and $\frac{p}{q} < \frac{r}{s}$ then $\frac{p}{q} < \frac{p+r}{q+s} < \frac{r}{s}$.

❖ There are an infinite number of rational numbers between two unequal rational numbers.

SOLUTIONS

EXERCISE 1.1

1. What is a rational number? Is it true that every integer is a rational number?

Ans:- Rational number is a number which can be expressed in the form of $\frac{p}{q}$ where p, q are integers and $q \neq 0$.

Yes, it is true that every integer is a rational number.



2. If a and b are two unequal rational numbers, show that $\frac{a+b}{2}$ is a rational number lying between a and b .

Soln :- Let us suppose that

$$a < b$$

$$\Rightarrow a + b < b + b \quad [\text{adding } b \text{ to both sides}]$$

$$\Rightarrow a + b < 2b$$

$$\Rightarrow \frac{a+b}{2} < \frac{2b}{2} \quad [\text{dividing both sides by } 2]$$

$$\Rightarrow \frac{a+b}{2} < b \quad \text{----- (1)}$$

Again, $a < b$

$$\Rightarrow a + a < a + b \quad [\text{adding } a \text{ to both sides}]$$

$$\Rightarrow 2a < a + b$$

$$\Rightarrow \frac{2a}{2} < \frac{a+b}{2} \quad [\text{dividing both sides by } 2]$$

$$\Rightarrow a < \frac{a+b}{2} \quad \text{----- (2)}$$

Combining (1) and (2), we can write

$$a < \frac{a+b}{2} < b$$

So, $\frac{a+b}{2}$ is a rational number lying between a and b .

3. Insert four rational numbers between 2 and 3.

Solution :- $2 < 3$

$$\Rightarrow 2 < \frac{2+3}{2} < 3$$

$$\Rightarrow 2 < \frac{5}{2} < 3$$

$$\Rightarrow 2 < 2.5 < 3$$

$$\Rightarrow 2 < \frac{2+2.5}{2} < 2.5 < \frac{2.5+3}{2} < 3$$

$$\Rightarrow 2 < \frac{4.5}{2} < 2.5 < \frac{5.5}{2} < 3$$

$$\Rightarrow 2 < 2.25 < 2.5 < 2.75 < 3$$

$$\Rightarrow 2 < \frac{2+2.25}{2} < 2.25 < 2.5 < 2.75 < 3$$

$$\Rightarrow 2 < \frac{4.25}{2} < 2.25 < 2.5 < 2.75 < 3$$

$$\Rightarrow 2 < 2.125 < 2.25 < 2.5 < 2.75 < 3$$



4. Find five rational numbers between $\frac{1}{4}$ and $\frac{1}{3}$.

Solution:- $\frac{1}{4} < \frac{1}{3}$

$$\Rightarrow \frac{1}{4} < \frac{1}{2} \left(\frac{1}{4} + \frac{1}{3} \right) < \frac{1}{3}$$

$$\Rightarrow \frac{1}{4} < \frac{1}{2} \left(\frac{3+4}{12} \right) < \frac{1}{3}$$

$$\Rightarrow \frac{1}{4} < \frac{7}{24} < \frac{1}{3}$$

$$\Rightarrow \frac{1}{4} < \frac{1}{2} \left(\frac{1}{4} + \frac{7}{24} \right) < \frac{7}{24} < \frac{1}{2} \left(\frac{7}{24} + \frac{1}{3} \right) < \frac{1}{3}$$

$$\Rightarrow \frac{1}{4} < \frac{1}{2} \left(\frac{6+7}{24} \right) < \frac{7}{24} < \frac{1}{2} \left(\frac{7+8}{24} \right) < \frac{1}{3}$$

$$\Rightarrow \frac{1}{4} < \frac{13}{48} < \frac{7}{24} < \frac{15}{48} < \frac{1}{3}$$

$$\Rightarrow \frac{1}{4} < \frac{1}{2} \left(\frac{1}{4} + \frac{13}{48} \right) < \frac{13}{48} < \frac{1}{2} \left(\frac{13}{48} + \frac{7}{24} \right) < \frac{7}{24} < \frac{15}{48} < \frac{1}{3}$$

$$\Rightarrow \frac{1}{4} < \frac{1}{2} \left(\frac{12+13}{48} \right) < \frac{13}{48} < \frac{1}{2} \left(\frac{13+14}{48} \right) < \frac{7}{24} < \frac{15}{48} < \frac{1}{3}$$

$$\Rightarrow \frac{1}{4} < \frac{25}{96} < \frac{13}{48} < \frac{27}{96} < \frac{7}{24} < \frac{15}{48} < \frac{1}{3}$$

5. Find six rational numbers between $\frac{1}{3}$ and $\frac{2}{3}$.

Solution:- Using $\frac{p}{q} < \frac{r}{s} \Rightarrow \frac{p}{q} < \frac{p+r}{q+s} < \frac{r}{s}$, we can write

$$\frac{1}{3} < \frac{2}{3}$$

$$\Rightarrow \frac{1}{3} < \frac{1+2}{3+3} < \frac{2}{3}$$

$$\Rightarrow \frac{1}{3} < \frac{1}{2} < \frac{2}{3}$$

$$\Rightarrow \frac{1}{3} < \frac{2}{5} < \frac{1}{2} < \frac{3}{5} < \frac{2}{3}$$

$$\Rightarrow \frac{1}{3} < \frac{3}{8} < \frac{2}{5} < \frac{3}{7} < \frac{1}{2} < \frac{4}{7} < \frac{3}{5} < \frac{5}{8} < \frac{2}{3}$$

So, six rational numbers between $\frac{1}{3}$ and $\frac{2}{3}$ are $\frac{3}{8}$, $\frac{2}{5}$, $\frac{3}{7}$, $\frac{1}{2}$, $\frac{4}{7}$, $\frac{3}{5}$ and $\frac{5}{8}$.





❖ Prove that $\sqrt{2}$ is not a rational number.

Proof :- Let us suppose that $\sqrt{2}$ is a rational number. Then there exists integers p and q such that

$$q \neq 0, p, q \text{ are co-prime and } \frac{p}{q} = \sqrt{2}$$

$$\therefore \left(\frac{p}{q}\right)^2 = (\sqrt{2})^2 \text{ [Squaring both sides]}$$

$$\Rightarrow \frac{p^2}{q^2} = 2$$

$$\Rightarrow \frac{p^2}{q \cdot q} = 2$$

$$\Rightarrow \frac{p^2}{q} = 2q \dots\dots\dots(1)$$

As p and q are co-prime, the left side of (1) is a fraction except for $q = 1$ but the right side is an integer.

$$\text{If } q = 1, \frac{p^2}{1} = 2 \times 1$$

$$\Rightarrow p^2 = 2 \text{ in which both sides are integers.}$$

It means that the square of p is 2. But there is no integer whose square is 2. [$\because 1^2 < 2 < 2^2$]

So, our supposition that $\sqrt{2}$ is a rational number is contradicted.

Hence $\sqrt{2}$ is not a rational number.

❖ Dedekind-Cantor Axiom

“To every real number there corresponds a unique point on the number line and to every point on the number line there corresponds a unique real number.”

Irrational numbers:

Irrational numbers are numbers represented on the number line by points other than those representing rational numbers.

Real numbers

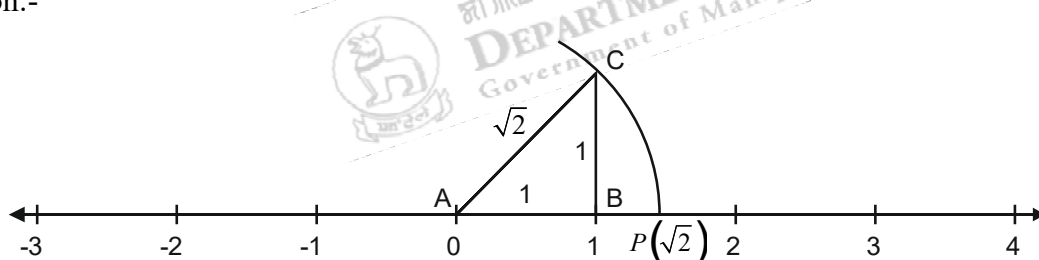
Real numbers are numbers which are either rational or irrational.

SOLUTIONS

EXERCISE 1.2

1. Show that there exist points on the number line not representing rational numbers.

Solution:-





মণিপুরৰ শাসনৰত্ন (সংস্কৃত)

DEPARTMENT OF EDUCATION (S)

Government of Manipur

On the number line, the point A represents 0 and B represents 1. We draw $BC=1$ unit perpendicular to AB and we join AC.

In the rt. $\triangle ABC$,

$$AC^2 = AB^2 + BC^2 \quad [\text{Pythagoras theorem}]$$

$$\Rightarrow AC^2 = 1^2 + 1^2$$

$$\Rightarrow AC^2 = 1 + 1$$

$$\Rightarrow AC^2 = 2$$

$$\Rightarrow AC = \sqrt{2}$$

We draw an arc with centre A and radius AC intersecting the number line at P on the right of A. Thus P represents $\sqrt{2}$. But $\sqrt{2}$ is not a rational number. So, there exists points on the number line not representing rational numbers.

2. Prove that there is no rational number whose square is 3.

Solution:- Let if possible x be a rational number such that $x^2=3$.

Then $x = \sqrt{3}$ is a rational number.

\Rightarrow there exist co-prime integers p and q such that $\sqrt{3} = \frac{p}{q}$.

$$\Rightarrow 3q^2 = p^2 \quad \text{----- (1)}$$

$$\Rightarrow 3 \text{ divides } p^2$$

$$\Rightarrow 3 \text{ divides } p$$

$$\Rightarrow p = 3p_1 \quad \text{----- (2) where } p_1 \text{ is some integer.}$$

From (1) and (2),

$$3q^2 = 9p_1^2$$

$$\Rightarrow q^2 = 3p_1^2$$

$$\Rightarrow 3 \text{ divides } q$$

$$\Rightarrow q = 3q_1 \quad \text{----- (3) where } q_1 \text{ is some integer.}$$

From (2) and (3), p and q have a common factor 3.

It contradicts that p and q are co-prime.

So, x is not a rational number.

Hence there is no rational number whose square is 3.



3. Prove that $\sqrt{5}$ is an irrational number.

Proof :- Let us suppose that $\sqrt{5}$ is not an irrational number i.e $\sqrt{5}$ is a rational number. Then

there exists integers p and q such that $q \neq 0$, p, q are co-prime and $\frac{p}{q} = \sqrt{5}$

$$\therefore \left(\frac{p}{q}\right)^2 = (\sqrt{5})^2 \text{ [Squaring both sides]}$$

$$\Rightarrow \frac{p^2}{q^2} = 5$$

$$\Rightarrow \frac{p^2}{q \cdot q} = 5$$

$$\Rightarrow \frac{p^2}{q} = 5q \dots\dots\dots(1)$$

As p and q are co-prime, the left side of (1) is a fraction except for $q = 1$ but the right side is an integer.

$$\text{If } q = 1, \frac{p^2}{1} = 5 \times 1$$

$$\Rightarrow p^2 = 5 \text{ in which both sides are integers.}$$

It means that the square of p is 5.

But there is no integer whose square is 5. [$\because 2^2 < 5 < 3^2$ & no other integer between 2 and 3]

So, our supposition that $\sqrt{5}$ is a rational number is contradicted.

Hence $\sqrt{5}$ is not a rational number i.e. $\sqrt{5}$ is an irrational number.

4. Prove that $\sqrt{7}$ is not a rational number.

Proof :- Let us suppose that $\sqrt{7}$ is not a rational number. Then there exists integers p and q

such that $q \neq 0$, p, q are co-prime and $\frac{p}{q} = \sqrt{7}$

$$\therefore \left(\frac{p}{q}\right)^2 = (\sqrt{7})^2 \text{ [Squaring both sides]}$$

$$\Rightarrow \frac{p^2}{q^2} = 7$$

$$\Rightarrow \frac{p^2}{q \cdot q} = 7$$

$$\Rightarrow \frac{p^2}{q} = 7q \dots\dots\dots(1)$$

As p and q are co-prime, the left side of (1) is a fraction except for $q = 1$ but the right side is an integer.

$$\text{If } q = 1, \frac{p^2}{1} = 7 \times 1$$

$$\Rightarrow p^2 = 7 \text{ in which both sides are integers.}$$



ꯏꯪꯂꯩꯛꯐꯥꯛ ꯏꯪ ꯂꯩꯛꯐꯥꯛ (ꯏꯪ)

DEPARTMENT OF EDUCATION (S)

Government of Manipur

It means that the square of p is 7.

But there is no integer whose square is 7. [$\because 2^2 < 7 < 3^2$ and no other integer

between 2 and 3]

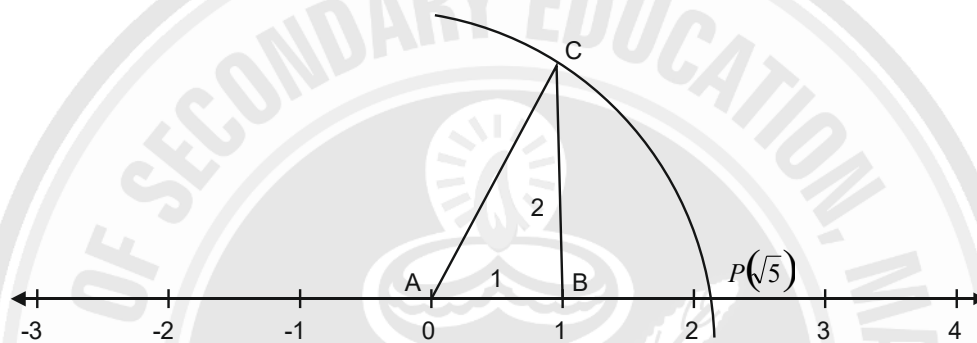
So, our supposition that $\sqrt{7}$ is a rational number is contradicted.

Hence $\sqrt{7}$ is not a rational number.

5. Represent the following number on the number line.

(i) $\sqrt{5}$

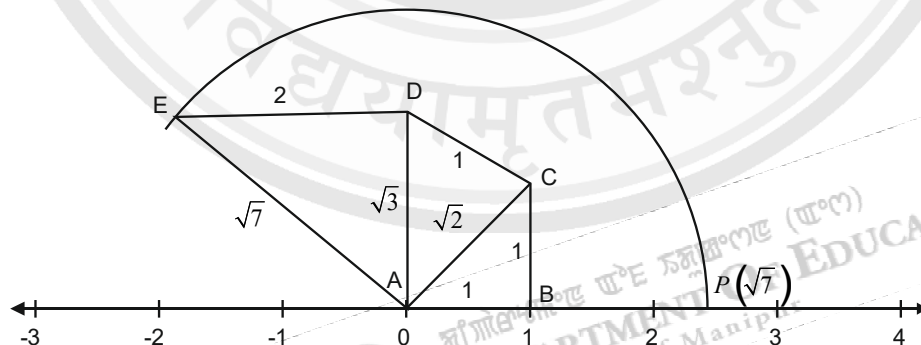
Solution:-



On the number line, A represents 0 and B represents 1. We draw $BC=2$ units perpendicular to AB and we join AC and $AC = \sqrt{1^2 + 2^2} = \sqrt{5}$. We draw an arc with centre A and radius AC intersecting the number line at P on the right of A. Thus P represents $\sqrt{5}$.

(ii) $\sqrt{7}$

Solution:-



On the number line, A represents 0, B represents 1, we draw $BC=1$ unit perpendicular to AB and we join AC . We draw $CD=1$ unit perpendicular to AC and we join AD . We draw $DE=2$ units perpendicular to AD and we join AE . We draw an arc with centre A and radius $AE = \sqrt{7}$ intersecting the number at P on the right of A. Thus P represents $\sqrt{7}$.



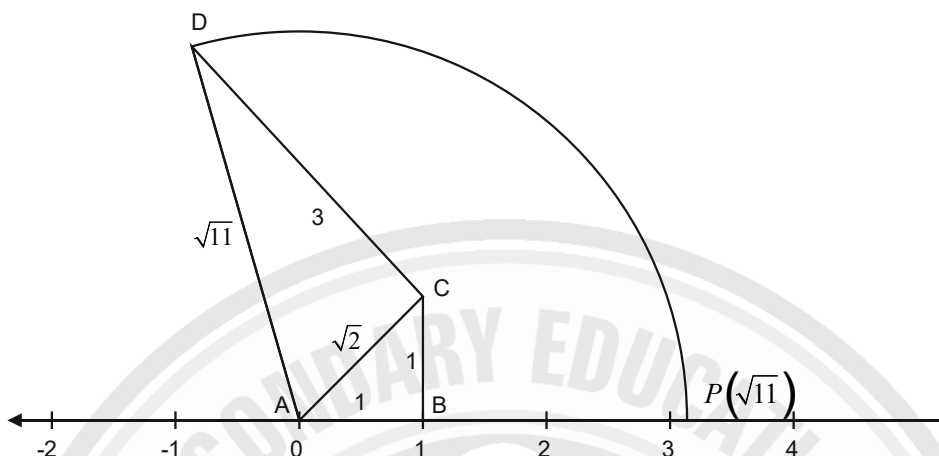
জগদীশ্বরনাথ ঝাং নক্সাশিল্প (সংস্করণ)

DEPARTMENT OF EDUCATION (S)

Government of Manipur

(iii) $\sqrt{11}$

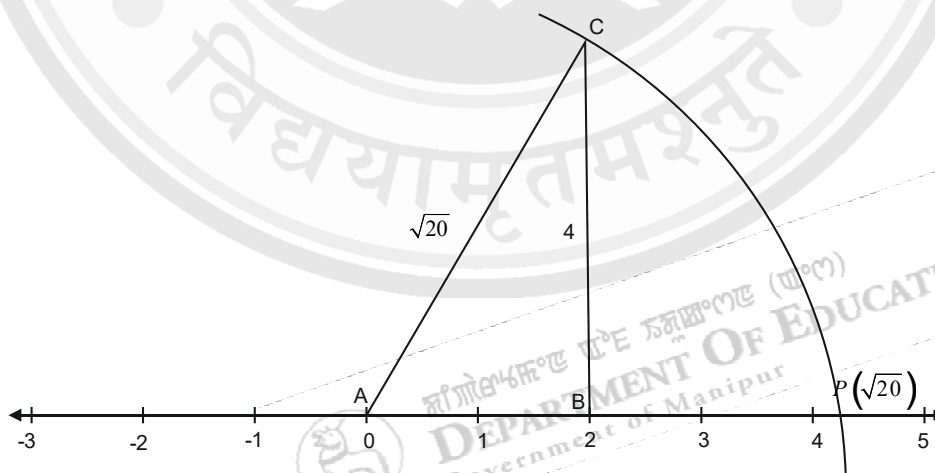
Solution:-



On the number line, A represents 0, B represents 1. We draw $BC=1$ unit perpendicular to AB and we join AC . We draw $CD=3$ units perpendicular to AC and we join AD . We draw an arc with centre A and radius $AD=\sqrt{11}$ intersecting the number line at P on the right of A . Thus P represents $\sqrt{11}$.

(iv) $\sqrt{20}$

Solution:-



On the number line, A represents 0, B represents 2. We draw $BC=4$ units perpendicular to AB and we join AC . We draw an arc with centre A and radius $AC=\sqrt{20}$ intersecting the number line at P on the right of A . Thus P represents $\sqrt{20}$.



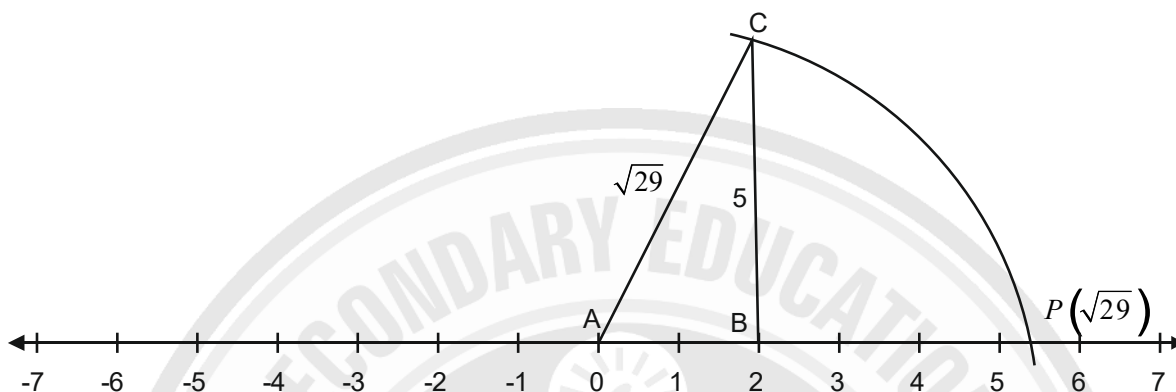
মণিপুরৰ শাসনৰত্ন (সংস্কৃতি)

DEPARTMENT OF EDUCATION (S)

Government of Manipur

(v) $\sqrt{29}$

Solution:-

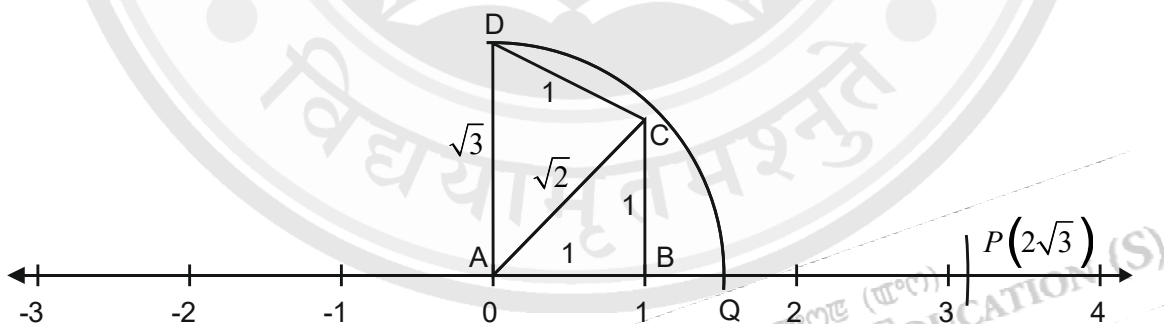


On the number line, A represents 0 and B represents 2. We draw $BC=5$ units perpendicular to AB and we join AC . We draw an arc with centre A and radius $AC=\sqrt{29}$ intersecting the number line at P on the right of A . Thus P represents $\sqrt{29}$.

6. Locate on the number line the point representing the following number:

(i) $2\sqrt{3}$

Solution:-



On the number line, A represents 0 and B represents 1. We draw $BC=1$ unit perpendicular to AB and we join AC . We draw $CD=1$ unit perpendicular to AC and we join AD . We draw an arc with centre A and radius $AD=\sqrt{3}$ intersecting the number line at Q on the right of A . Again we draw another arc with centre Q and the same radius as before intersecting the number line at P on the right of Q . Thus P represents $2\sqrt{3}$.



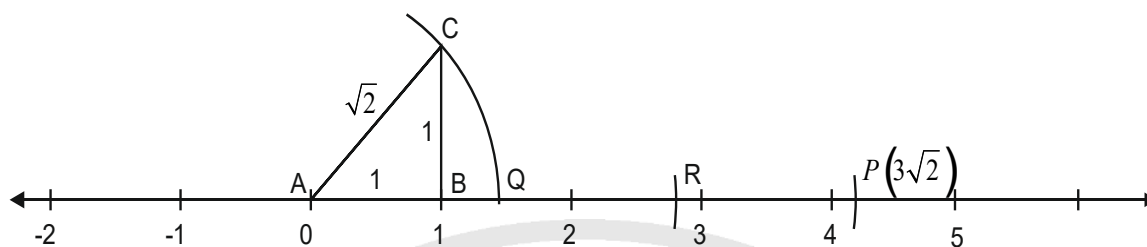
মণিপুরৰ শাসনালয় (মণি)

DEPARTMENT OF EDUCATION (S)

Government of Manipur

(ii) $3\sqrt{2}$

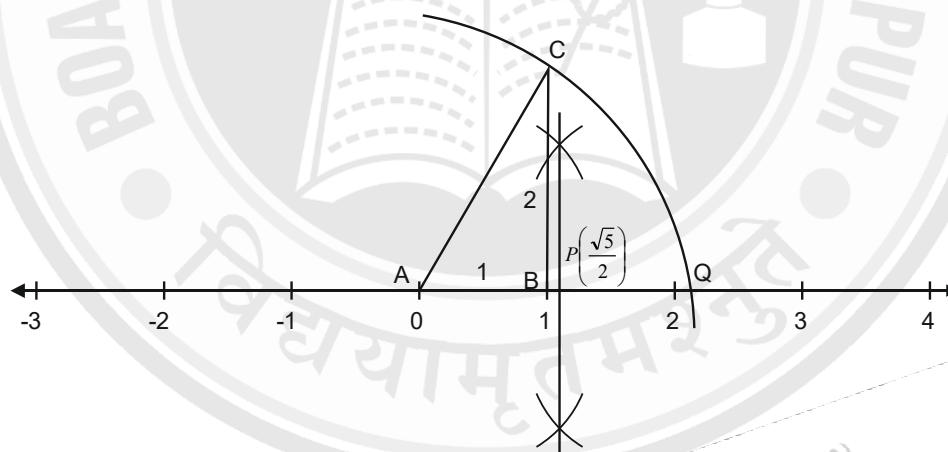
Solution:-



On the number line, A represents 0 and B represents 1. We draw $BC=1$ unit perpendicular to AB and we join AC . We draw three arcs with centres A, Q, R with $AC= \sqrt{2}$ as radius intersecting the line at Q, R and P respectively on the right of A . Thus P represents $3\sqrt{2}$.

(iii) $\frac{\sqrt{5}}{2}$

Solution:-



On the number line, A represents 0 and B represents 1. We draw $BC=2$ units perpendicular to AB and we join AC . We draw an arc with centre A and radius $AC= \sqrt{5}$ intersecting the number line at Q on the right of A . AQ is bisected at P . Thus P represents $\frac{\sqrt{5}}{2}$.



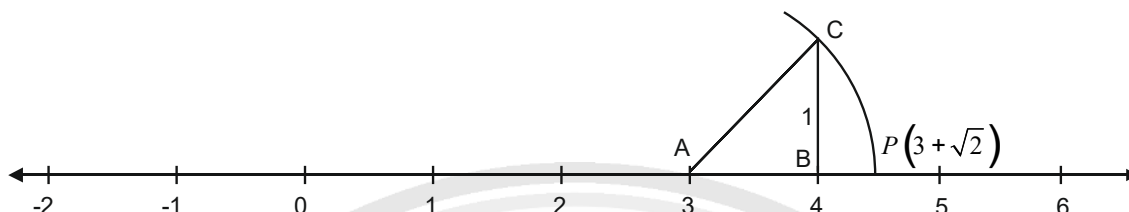
মহাশিক্ষা বিভাগ (সি)

DEPARTMENT OF EDUCATION (S)

Government of Manipur

(iv) $3 + \sqrt{2}$

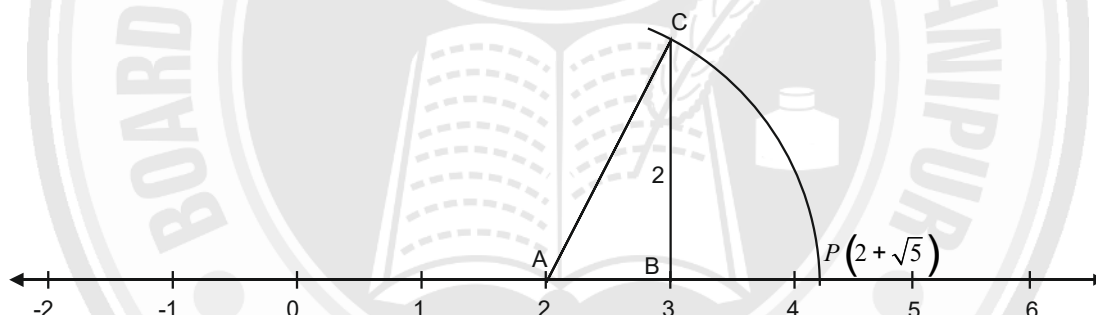
Solution:-



On the number line, A represents 3 and B represents 4. We draw $BC=1$ unit perpendicular to AB and we join AC . We draw an arc with centre A and radius $AC=\sqrt{2}$ intersecting the number line at P on the right of A . Thus P represents $3 + \sqrt{2}$

(v) $2 + \sqrt{5}$

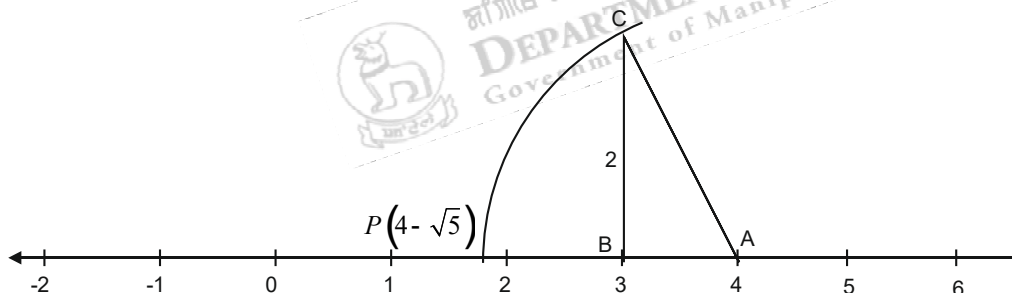
Solution:-



On the number line, A represents 2 and B represents 3. We draw $BC=2$ unit perpendicular to AB and we join AC . We draw an arc with centre A and radius $AC=\sqrt{5}$ intersecting the number line at P on the right of A . Thus P represents $2 + \sqrt{5}$

(vi) $4 - \sqrt{5}$

Solution:-

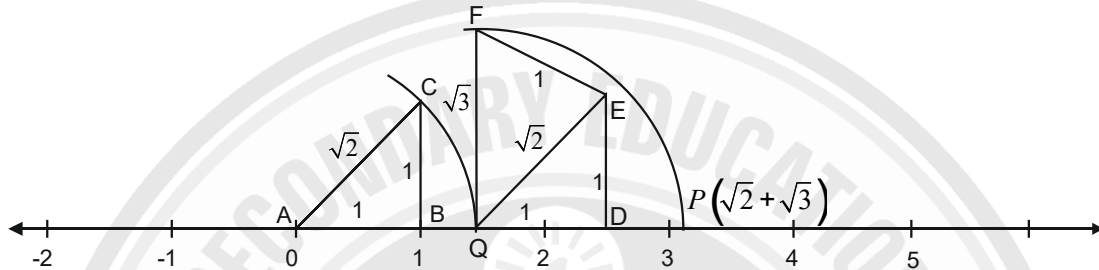




On the number line A represents 4 and B represents 3. We draw $BC=2$ unit perpendicular to AB and we join AC. We draw an arc with centre A and radius $AC=\sqrt{5}$ intersecting the number line at P on the left of A. Thus P represents $4 - \sqrt{5}$.

vii) $\sqrt{2} + \sqrt{3}$

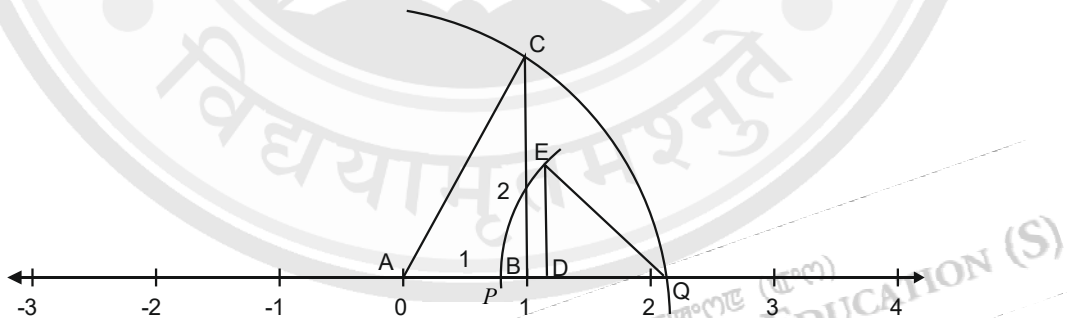
Solution:-



On the number line, Q represents $\sqrt{2}$ and D is taken on the right of Q such that $QD=1$ unit. We draw $DE=1$ unit perpendicular to QD and we join QE . We draw $EF=1$ unit perpendicular to QE and we join QF . We draw an arc with centre Q and radius QF intersecting the number line at P on the right of Q. Thus P represents $\sqrt{2} + \sqrt{3}$.

viii). $\sqrt{5} - \sqrt{2}$

Solution:-



On the number line, Q represents $\sqrt{5}$ and we take a point D on the left of Q such that $QD=1$ unit. We draw $DE=1$ unit perpendicular to QD and we join QE . We draw an arc with centre Q and radius QE intersecting the number line at P on the left of Q. Thus P represents $\sqrt{5} - \sqrt{2}$.

7. Write any three rational numbers and any three irrational numbers lying between 2.1 and 2.2.

Ans:- Three rational numbers between 2.1 and 2.2 are 2.11, 2.12, 2.13.

Three irrational numbers between 2.1 and 2.2 are 2.11010010001..., 2.12020020002..., 2.13030030003...



Ans :- $\frac{I}{3} = 0.33..$
 $\frac{I}{2} = 0.5$

0.34040040004....., 0.353353335....., 0.4040040004....., 0.4242242224.....

❖ **Laws of exponents:-** If m, n are integers and x, y are non-zero rational numbers, then

i) $x^m \times x^n = x^{m+n}$

ii) $\frac{x^m}{x^n} = x^{m-n}$

iii) $(xy)^m = x^m y^m$

iv) $(x^m)^n = x^{mn}$

The above Laws of exponents hold good when bases are positive real numbers and exponents are rational numbers, positive or negative.

❖ Show that $x^0=1$ for any non zero rational number x .

Solution:- We know that

$$\frac{x^m}{x^n} = x^{m-n}$$

If $m = n$,

$$\frac{x^n}{x^n} = x^{n-n}$$

$$\Rightarrow 1 = x^0 \quad \therefore x^0 = 1$$

❖ Show that $x^{-n} = \frac{1}{x^n}$ for any non-zero rational number x .

Solution :- We know that,

$$\frac{x^m}{x^n} = x^{m-n}$$

If $m = 0$,

$$\frac{x^0}{x^n} = x^{0-n}$$

$$\frac{1}{x^n} = x^{-n}$$

$$\therefore x^{-n} = \frac{1}{x^n}$$

❖ **Rationalising factor**

If the product of two irrational numbers is a rational number then each is called a rationalising factor of the other.

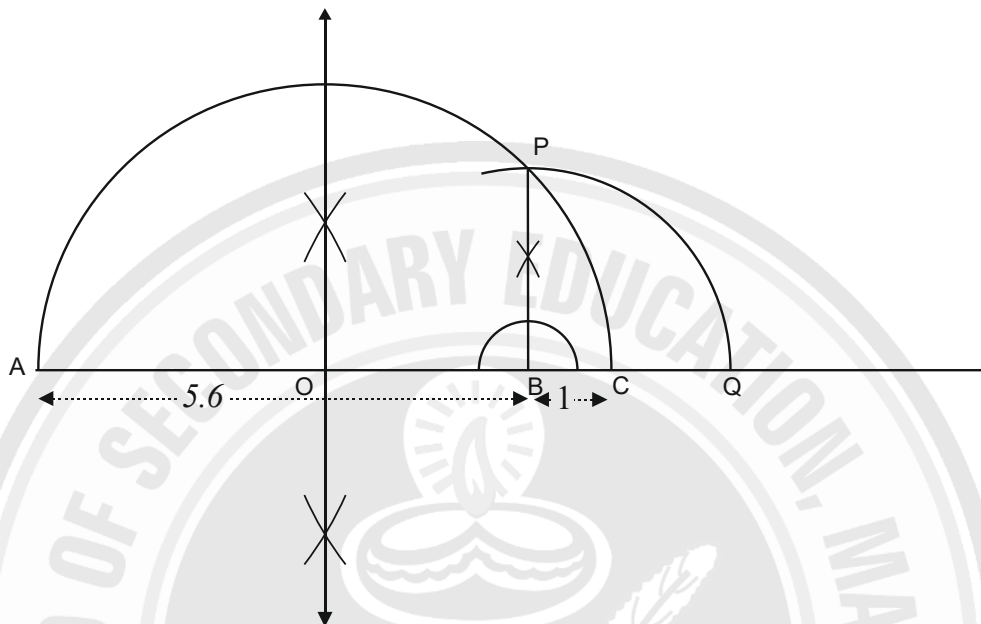


SOLUTIONS

EXERCISE 1.3

1. Construct a line segment of length $\sqrt{5.6}$.

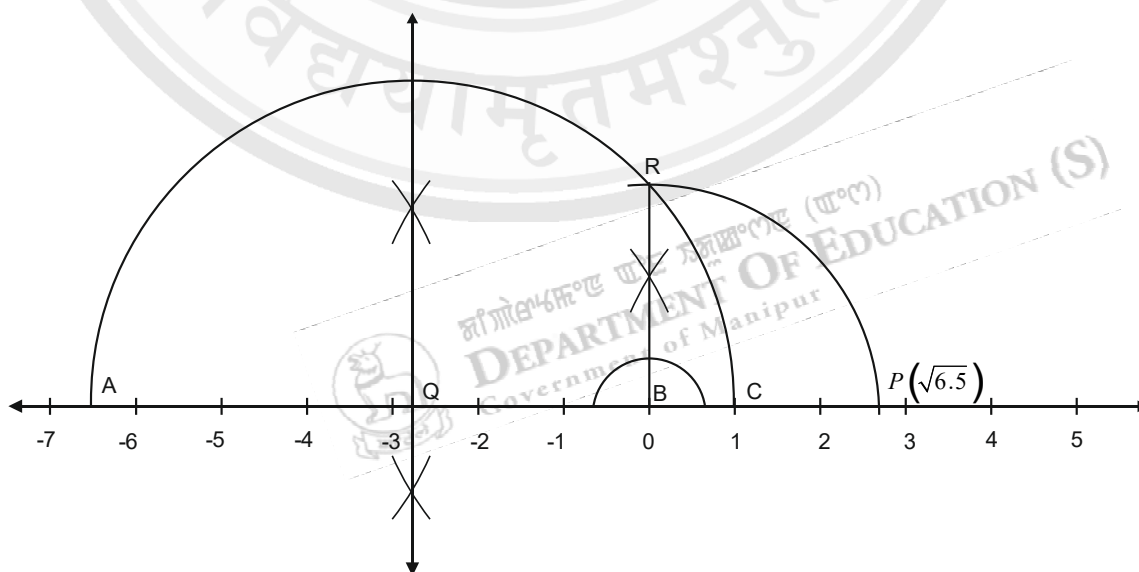
Solution:-



We draw a line segment $AB=5.6$ units and we produce it to C such that $BC=1$ unit. We bisect AC at O and we draw a semi-circle with centre O and radius OA . We draw a line perpendicular to AC at B intersecting the semi circle at P . Again an arc is drawn with centre B and radius BP to intersect the BC produced at Q . Thus $BQ=\sqrt{5.6}$.

2. Represent $\sqrt{6.5}$ on the number line.

Solution:-





On the number line, B represents 0 and we take a point A on the left of B such that $BA=6.5$ units. C represents 1. We bisect AC at Q and we draw a semi circle with centre Q and radius QA. We draw a perpendicular at B with AC intersecting the semi circle at R. We draw an arc with centre B and radius BR intersecting the number line at P on the right of B. Thus P represents $\sqrt{6.5}$.

3. Classify the following numbers as rational or irrational:

(i) $3 + \sqrt{2}$

Ans:- Irrational

(ii) $3 - \sqrt{2}$

Ans :- Irrational

(iii) $2\sqrt{5}$

Ans :- Irrational

(iv) $\frac{1}{\sqrt{7}}$

Ans :- Irrational

(v) $(3 + \sqrt{3}) - \sqrt{3}$

Ans:- $(3 + \sqrt{3}) - \sqrt{3}$
 $= 3 + \sqrt{3} - \sqrt{3}$
 $= 3$, which is a rational.

(vi) $(13 + \sqrt{7}) + (4 - \sqrt{7})$

Ans:- $(13 + \sqrt{7}) + (4 - \sqrt{7})$
 $= 13 + \sqrt{7} + 4 - \sqrt{7}$
 $= 13 + 4$
 $= 17$, which is a rational.

(vii) $\frac{4\sqrt{21}}{5\sqrt{21}}$

Ans:- $\frac{4\sqrt{21}}{5\sqrt{21}} = \frac{4}{5}$, which is a rational.

(viii) $(\sqrt{2} + \sqrt{3})(\sqrt{3} - \sqrt{2})$

Ans:- $(\sqrt{2} + \sqrt{3})(\sqrt{3} - \sqrt{2})$
 $= (\sqrt{3} + \sqrt{2})(\sqrt{3} - \sqrt{2})$
 $= (\sqrt{3})^2 - (\sqrt{2})^2$
 $= 3 - 2 = 1$, which is a rational.



4. Simplify:-

(i) $\sqrt{18} + \sqrt{64}$

Solution:- $\sqrt{18} + \sqrt{64} = \sqrt{3^2 \times 2} + \sqrt{2^2 \times 2^2 \times 2^2}$
 $= 3\sqrt{2} + 2 \times 2 \times 2$
 $= 3\sqrt{2} + 8$
 $= 8 + 3\sqrt{2}$

(ii) $\sqrt{48} + \sqrt{12}$

Solution:- $\sqrt{48} + \sqrt{12} = \sqrt{2^2 \times 2^2 \times 3} + \sqrt{2^2 \times 3}$
 $= 2 \times 2\sqrt{3} + 2\sqrt{3}$
 $= 4\sqrt{3} + 2\sqrt{3}$
 $= 6\sqrt{3}$

(iii) $\sqrt{5} + \sqrt{80}$

Solution:- $\sqrt{5} + \sqrt{80} = \sqrt{5} + \sqrt{2^2 \times 2^2 \times 5}$
 $= \sqrt{5} + 2 \times 2\sqrt{5}$
 $= \sqrt{5} + 4\sqrt{5}$
 $= 5\sqrt{5}$

(iv) $\sqrt{50} - \sqrt{32}$

Solution:- $\sqrt{50} - \sqrt{32} = \sqrt{5^2 \times 2} - \sqrt{2^2 \times 2^2 \times 2}$
 $= 5\sqrt{2} - 2 \times 2\sqrt{2}$
 $= 5\sqrt{2} - 4\sqrt{2}$
 $= \sqrt{2}$

(v) $\sqrt{363} - \sqrt{147}$

Solution:- $\sqrt{363} - \sqrt{147} = \sqrt{11^2 \times 3} - \sqrt{7^2 \times 3}$
 $= 11\sqrt{3} - 7\sqrt{3}$
 $= 4\sqrt{3}$

(vi) $2\sqrt{45} - 5\sqrt{20} + \sqrt{80}$

Solution:- $2\sqrt{45} - 5\sqrt{20} + \sqrt{80} = 2\sqrt{3^2 \times 5} - 5\sqrt{2^2 \times 5} + \sqrt{2^2 \times 2^2 \times 5}$
 $= 2 \times 3\sqrt{5} - 5 \times 2\sqrt{5} + 2 \times 2\sqrt{5}$
 $= 6\sqrt{5} - 10\sqrt{5} + 4\sqrt{5}$
 $= 10\sqrt{5} - 10\sqrt{5}$
 $= 0$



জাণাৰ্ৱক্ষণ্ডে ৱেদে নক্সাৰ্ৱণ্ডে (ৱেদে)

DEPARTMENT OF EDUCATION (S)

Government of Manipur

(vii) $2\sqrt{12} + \sqrt{75} - 7\sqrt{3}$

Solution:- $2\sqrt{12} + \sqrt{75} - 7\sqrt{3} = 2\sqrt{2^2 \times 3} + \sqrt{5^2 \times 3} - 7\sqrt{3}$
 $= 2 \times 2\sqrt{3} + 5\sqrt{3} - 7\sqrt{3}$
 $= 4\sqrt{3} + 5\sqrt{3} - 7\sqrt{3}$
 $= 9\sqrt{3} - 7\sqrt{3}$
 $= 2\sqrt{3}$

(viii) $\sqrt{7} \times \sqrt{14}$

Solution :- $\sqrt{7} \times \sqrt{14} = \sqrt{7 \times 14}$
 $= \sqrt{7 \times 2 \times 7}$
 $= \sqrt{2 \times 7^2} = 7\sqrt{2}$

(ix) $2\sqrt{3} \times 3\sqrt{2}$

Solution:- $2\sqrt{3} \times 3\sqrt{2} = 2 \times 3\sqrt{3 \times 2} = 6\sqrt{6}$

(x) $8\sqrt{12} \times 3\sqrt{24}$

Solution:- $8\sqrt{12} \times 3\sqrt{24} = 8\sqrt{2^2 \times 3} \times 3\sqrt{2^2 \times 2 \times 3}$
 $= 8 \times 2\sqrt{3} \times 3 \times 2\sqrt{2 \times 3}$
 $= 8 \times 2 \times 3 \times 2\sqrt{3 \times 2 \times 3}$
 $= 96\sqrt{3^2 \times 2}$
 $= 96 \times 3\sqrt{2}$
 $= 288\sqrt{2}$

(xi) $3\sqrt{10} \div 4\sqrt{15}$

Solution :- $3\sqrt{10} \div 4\sqrt{15} = \frac{3\sqrt{10}}{4\sqrt{15}}$
 $= \frac{3\sqrt{10 \times 15}}{4\sqrt{15 \times 15}}$
 $= \frac{3\sqrt{10 \times 15}}{4 \times 15}$
 $= \frac{3\sqrt{2 \times 5 \times 3 \times 5}}{4 \times 3 \times 5}$
 $= \frac{\sqrt{2 \times 3 \times 5^2}}{4 \times 5}$
 $= \frac{5\sqrt{2 \times 3}}{4 \times 5}$
 $= \frac{\sqrt{6}}{4}$



(xii) $6\sqrt{12} \div 3\sqrt{27}$

Solution:- $6\sqrt{12} \div 3\sqrt{27} = \frac{6\sqrt{12}}{3\sqrt{27}}$
 $= \frac{6\sqrt{12}}{3\sqrt{27}}$
 $= \frac{2\sqrt{12}}{\sqrt{27}}$
 $= \frac{2\sqrt{2^2 \times 3}}{\sqrt{3^2 \times 3}}$
 $= \frac{2 \times 2\sqrt{3}}{3\sqrt{3}}$
 $= \frac{4}{3}$

5. Multiply:-

(i) $3\sqrt{5} + 2\sqrt{3}$ by $4\sqrt{5} - 5\sqrt{3}$

Solution:- $(3\sqrt{5} + 2\sqrt{3})(4\sqrt{5} - 5\sqrt{3})$
 $= 3\sqrt{5} \times 4\sqrt{5} - 3\sqrt{5} \times 5\sqrt{3} + 2\sqrt{3} \times 4\sqrt{5} - 2\sqrt{3} \times 5\sqrt{3}$
 $= 12 \times 5 - 15\sqrt{15} + 8\sqrt{15} - 10 \times 3$
 $= 60 - 7\sqrt{15} - 30$
 $= 30 - 7\sqrt{15}$

(ii) $\sqrt{2} + \sqrt{5} + \sqrt{7}$ by $\sqrt{2} + \sqrt{5} - \sqrt{7}$

Solution:- $(\sqrt{2} + \sqrt{5} + \sqrt{7})(\sqrt{2} + \sqrt{5} - \sqrt{7})$
 $= \{(\sqrt{2} + \sqrt{5}) + \sqrt{7}\} \{(\sqrt{2} + \sqrt{5}) - \sqrt{7}\}$
 $= (\sqrt{2} + \sqrt{5})^2 - \sqrt{7}^2$
 $= (\sqrt{2})^2 + 2\sqrt{2} \cdot \sqrt{5} + (\sqrt{5})^2 - 7$
 $= 2 + 2\sqrt{10} + 5 - 7$
 $= 2\sqrt{10} + 7 - 7$
 $= 2\sqrt{10}$



(iii) $\sqrt{3} - \sqrt{7} + 2\sqrt{5}$ by $\sqrt{3} + \sqrt{7} - 2\sqrt{5}$

$$\begin{aligned} \text{Solution:- } & (\sqrt{3} - \sqrt{7} + 2\sqrt{5})(\sqrt{3} + \sqrt{7} - 2\sqrt{5}) \\ &= \{\sqrt{3} - (\sqrt{7} - 2\sqrt{5})\} \{\sqrt{3} + (\sqrt{7} - 2\sqrt{5})\} \\ &= (\sqrt{3})^2 - (\sqrt{7} - 2\sqrt{5})^2 \\ &= 3 - \{(\sqrt{7})^2 - 2 \cdot \sqrt{7} \cdot 2\sqrt{5} + (2\sqrt{5})^2\} \\ &= 3 - (7 - 4\sqrt{35} + 4 \times 5) \\ &= 3 - 7 + 4\sqrt{35} - 20 \\ &= 3 - 27 + 4\sqrt{35} \\ &= -24 + 4\sqrt{35} \end{aligned}$$

6. Express the following avoiding fractional or negative exponents:-

(i) $3^{\frac{2}{5}}$

Solution:- $3^{\frac{2}{5}} = \sqrt[5]{3^2}$

(ii) $5^{-\frac{3}{4}}$

Solution:- $5^{-\frac{3}{4}} = \frac{1}{5^{\frac{3}{4}}} = \frac{1}{\sqrt[4]{5^3}}$

(iii) $\frac{5}{2^{-\frac{4}{3}}}$

Solution:- $\frac{5}{2^{-\frac{4}{3}}} = 5 \times 2^{\frac{4}{3}} = 5\sqrt[3]{2^4}$

(iv) $3^{-\frac{2}{3}} \times 3^{-\frac{1}{2}}$

$$\begin{aligned} \text{Solution:- } & 3^{-\frac{2}{3}} \times 3^{-\frac{1}{2}} = 3^{-\frac{2}{3} + (-\frac{1}{2})} \\ &= 3^{-\frac{2}{3} - \frac{1}{2}} = 3^{-\frac{4+3}{6}} \\ &= 3^{-\frac{7}{6}} = \frac{1}{3^{\frac{7}{6}}} = \frac{1}{\sqrt[6]{3^7}} \end{aligned}$$

(v) $5^{-\frac{2}{3}} \div 2\sqrt{5^{-3}}$

$$\begin{aligned} \text{Solution:- } & \frac{5^{-\frac{2}{3}}}{2\sqrt{5^{-3}}} = \frac{1}{2} \times \frac{5^{-\frac{2}{3}}}{5^{-\frac{3}{2}}} \\ &= \frac{1}{2} \times 5^{-\frac{2}{3} - (-\frac{3}{2})} \\ &= \frac{1}{2} \times 5^{-\frac{2}{3} + \frac{3}{2}} \end{aligned}$$



মণিপুরৰ শ্বৰে সৰস্বতী (সংস্কৃত)

DEPARTMENT OF EDUCATION (S)

Government of Manipur

$$= \frac{1}{2} \times 5^{\frac{-4+9}{6}}$$

$$= \frac{1}{2} \times 5^{\frac{5}{6}}$$

$$= \frac{1}{2} \times \sqrt[6]{5^5}$$

7. Express the following avoiding radical signs and negative exponents:-

(i) $(\sqrt{3})^5$

Solution:- $(\sqrt{3})^5 = 3^{\frac{5}{2}}$

(ii) $(\sqrt[3]{5})^{-4}$

Solution:- $(\sqrt[3]{5})^{-4} = 5^{-\frac{4}{3}} = \frac{1}{5^{\frac{4}{3}}}$

(iii) $\frac{1}{\sqrt[5]{7^{-3}}}$

Solution:- $\frac{1}{\sqrt[5]{7^{-3}}} = \frac{1}{7^{-\frac{3}{5}}} = 7^{\frac{3}{5}}$

(iv) $\sqrt[3]{2^4} \times (\sqrt[6]{2})^{-2}$

Solution:- $\sqrt[3]{2^4} \times (\sqrt[6]{2})^{-2} = 2^{\frac{4}{3}} \times 2^{-\frac{2}{6}}$
 $= 2^{\frac{4}{3}} \times 2^{-\frac{1}{3}}$
 $= 2^{\frac{4}{3}-\frac{1}{3}}$
 $= 2^{\frac{4-1}{3}}$
 $= 2$

(v) $\sqrt[4]{3^{-5}} \div (\sqrt[6]{3})^{-9}$

Solution:- $\sqrt[4]{3^{-5}} \div (\sqrt[6]{3})^{-9} = 3^{-\frac{5}{4}} \div 3^{-\frac{9}{6}}$
 $= 3^{-\frac{5}{4}} \div 3^{-\frac{3}{2}}$
 $= 3^{-\frac{5}{4} + \frac{3}{2}}$
 $= 3^{\frac{-5+6}{4}}$
 $= 3^{\frac{1}{4}}$



জগাৰাংফাংলৈ আৰু নাজিমাংলৈ (আংল)

DEPARTMENT OF EDUCATION (S)

Government of Manipur

8. Find the value of

(i) $16^{-\frac{3}{4}}$

Solution:- $16^{-\frac{3}{4}} = (2^4)^{-\frac{3}{4}}$
 $= 2^{4 \times (-\frac{3}{4})}$
 $= 2^{-3}$
 $= \frac{1}{2^3}$
 $= \frac{1}{8}$

(ii) $\sqrt[5]{32^3}$

Solution:- $\sqrt[5]{32^3} = 32^{\frac{3}{5}}$
 $= (2^5)^{\frac{3}{5}}$
 $= 2^{5 \times \frac{3}{5}}$
 $= 2^3$
 $= 8$

(iii) $\sqrt{9^5}$

Solution:- $\sqrt{9^5} = 9^{\frac{5}{2}}$
 $= (3^2)^{\frac{5}{2}}$
 $= 3^{2 \times \frac{5}{2}}$
 $= 3^5$
 $= 243$

(iv) $125^{-\frac{2}{3}}$

Solution:- $125^{-\frac{2}{3}} = (5^3)^{-\frac{2}{3}}$
 $= 5^{3 \times (-\frac{2}{3})}$
 $= 5^{-2}$
 $= \frac{1}{5^2}$
 $= \frac{1}{25}$



জগাৰাংফাংলৈ আৰু নাজিমাংলৈ (আংল)
DEPARTMENT OF EDUCATION (S)
Government of Manipur



(v) $\left(\frac{1}{343}\right)^{-\frac{2}{3}}$

Solution:- $\left(\frac{1}{343}\right)^{-\frac{2}{3}} = \left(\frac{1}{7^3}\right)^{-\frac{2}{3}}$
 $= \left\{\left(\frac{1}{7}\right)^3\right\}^{-\frac{2}{3}}$
 $= \left(\frac{1}{7}\right)^{3 \times \left(-\frac{2}{3}\right)}$
 $= \left(\frac{1}{7}\right)^{-2}$
 $= 7^2 = 49$

9. Express with rational denominator.

(i) $\frac{\sqrt{3}+1}{4+3\sqrt{3}}$

Solution :- $\frac{\sqrt{3}+1}{4+3\sqrt{3}} = \frac{(\sqrt{3}+1)(4-3\sqrt{3})}{(4+3\sqrt{3})(4-3\sqrt{3})}$
 $= \frac{4\sqrt{3}-9+4-3\sqrt{3}}{4^2-(3\sqrt{3})^2}$
 $= \frac{\sqrt{3}-5}{16-27}$
 $= \frac{\sqrt{3}-5}{-11}$
 $= \frac{5-\sqrt{3}}{11}$

(ii) $\frac{3+4\sqrt{2}}{5-3\sqrt{2}}$

Solution:- $\frac{3+4\sqrt{2}}{5-3\sqrt{2}} = \frac{(3+4\sqrt{2})(5+3\sqrt{2})}{(5-3\sqrt{2})(5+3\sqrt{2})}$
 $= \frac{15+9\sqrt{2}+20\sqrt{2}+24}{5^2-(3\sqrt{2})^2}$
 $= \frac{39+29\sqrt{2}}{25-18}$
 $= \frac{39+29\sqrt{2}}{7}$

(iii) $\frac{\sqrt{5}+2\sqrt{3}}{\sqrt{5}+\sqrt{3}}$

Solution:- $\frac{\sqrt{5}+2\sqrt{3}}{\sqrt{5}+\sqrt{3}} = \frac{(\sqrt{5}+2\sqrt{3})(\sqrt{5}-\sqrt{3})}{(\sqrt{5}+\sqrt{3})(\sqrt{5}-\sqrt{3})}$
 $= \frac{5-\sqrt{15}+2\sqrt{15}-6}{(\sqrt{5})^2-(\sqrt{3})^2}$
 $= \frac{-1+\sqrt{15}}{5-3}$
 $= \frac{-1+\sqrt{15}}{2}$



(iv) $\frac{\sqrt{5}+\sqrt{3}}{4-\sqrt{15}}$

Solution:- $\frac{\sqrt{5}+\sqrt{3}}{4-\sqrt{15}} = \frac{(\sqrt{5}+\sqrt{3})(4+\sqrt{15})}{(4-\sqrt{15})(4+\sqrt{15})}$
 $= \frac{4\sqrt{5}+\sqrt{75}+4\sqrt{3}+\sqrt{45}}{4^2-(\sqrt{15})^2}$
 $= \frac{4\sqrt{5}+5\sqrt{3}+4\sqrt{3}+3\sqrt{5}}{16-15}$
 $= 7\sqrt{5}+9\sqrt{3}$

(v) $\frac{1}{1+\sqrt{6}-\sqrt{7}}$

Solution:- $\frac{1}{1+\sqrt{6}-\sqrt{7}} = \frac{1\{(1+\sqrt{6})+\sqrt{7}\}}{\{(1+\sqrt{6})-\sqrt{7}\}\{(1+\sqrt{6})+\sqrt{7}\}}$
 $= \frac{1+\sqrt{6}+\sqrt{7}}{(1+\sqrt{6})^2-\sqrt{7}^2}$
 $= \frac{1+\sqrt{6}+\sqrt{7}}{1^2+2.1.\sqrt{6}+\sqrt{6}^2-7}$
 $= \frac{1+\sqrt{6}+\sqrt{7}}{1+2\sqrt{6}+6-7}$
 $= \frac{(1+\sqrt{6}+\sqrt{7})\sqrt{6}}{2\sqrt{6}\times\sqrt{6}}$
 $= \frac{\sqrt{6}+6+\sqrt{42}}{2\times 6}$
 $= \frac{6+\sqrt{6}+\sqrt{42}}{12}$

(vi) $\frac{4}{1+\sqrt{2}+\sqrt{3}}$

Solution:- $\frac{4}{1+\sqrt{2}+\sqrt{3}} = \frac{4\{(1+\sqrt{2})-\sqrt{3}\}}{\{(1+\sqrt{2})+\sqrt{3}\}\{(1+\sqrt{2})-\sqrt{3}\}}$
 $= \frac{4(1+\sqrt{2}-\sqrt{3})}{(1+\sqrt{2})^2-(\sqrt{3})^2}$
 $= \frac{4(1+\sqrt{2}-\sqrt{3})}{1^2+2.1.\sqrt{2}+\sqrt{2}^2-3}$
 $= \frac{4(1+\sqrt{2}-\sqrt{3})}{1+2\sqrt{2}+2-3}$
 $= \frac{4(1+\sqrt{2}-\sqrt{3})}{3+2\sqrt{2}-3}$
 $= \frac{4(1+\sqrt{2}-\sqrt{3})}{2\sqrt{2}}$
 $= \frac{2(1+\sqrt{2}-\sqrt{3})}{\sqrt{2}}$
 $= \frac{2(1+\sqrt{2}-\sqrt{3})\times\sqrt{2}}{\sqrt{2}\times\sqrt{2}}$



সিঙ্গাৰাংলৈ আৰু নগৰালৈ (সংস্কৃতি)

DEPARTMENT OF EDUCATION (S)

Government of Manipur

$$= \frac{2(\sqrt{2}+2-\sqrt{6})}{2}$$

$$= 2 + \sqrt{2} - \sqrt{6}$$

(vii) $\frac{1}{\sqrt{2}+\sqrt{3}+\sqrt{5}}$

Solution:- $\frac{1}{\sqrt{2}+\sqrt{3}+\sqrt{5}} = \frac{1\{(\sqrt{2}+\sqrt{3})-\sqrt{5}\}}{\{(\sqrt{2}+\sqrt{3})+\sqrt{5}\}\{(\sqrt{2}+\sqrt{3})-\sqrt{5}\}}$

$$= \frac{\sqrt{2}+\sqrt{3}-\sqrt{5}}{(\sqrt{2}+\sqrt{3})^2-\sqrt{5}^2}$$

$$= \frac{\sqrt{2}+\sqrt{3}-\sqrt{5}}{(\sqrt{2})^2+2\sqrt{2}\sqrt{3}+(\sqrt{3})^2-5}$$

$$= \frac{\sqrt{2}+\sqrt{3}-\sqrt{5}}{2+2\sqrt{6}+3-5}$$

$$= \frac{\sqrt{2}+\sqrt{3}-\sqrt{5}}{5+2\sqrt{6}-5}$$

$$= \frac{\sqrt{2}+\sqrt{3}-\sqrt{5}}{2\sqrt{6}}$$

$$= \frac{(\sqrt{2}+\sqrt{3}-\sqrt{5})\times\sqrt{6}}{2\sqrt{6}\times\sqrt{6}}$$

$$= \frac{(\sqrt{12}+\sqrt{18}-\sqrt{30})}{2\times 6}$$

$$= \frac{2\sqrt{3}+3\sqrt{2}-\sqrt{30}}{12}$$

10. Simplify :-

(i) $\frac{\sqrt{18}+2\sqrt{27}}{\sqrt{75}-\sqrt{48}-\sqrt{32}+\sqrt{50}}$

Solution:- $\frac{\sqrt{18}+2\sqrt{27}}{\sqrt{75}-\sqrt{48}-\sqrt{32}+\sqrt{50}} = \frac{3\sqrt{2}+3\sqrt{3}}{5\sqrt{3}-4\sqrt{3}-4\sqrt{2}+5\sqrt{2}}$

$$= \frac{3(\sqrt{2}+\sqrt{3})}{\sqrt{2}+\sqrt{3}}$$

$$= 3$$

(ii) $\frac{\sqrt{18}}{\sqrt{3}+\sqrt{6}} - \frac{\sqrt{48}}{\sqrt{2}+\sqrt{6}} + \frac{\sqrt{6}}{\sqrt{2}+\sqrt{3}}$

Solution:- $\frac{\sqrt{18}}{\sqrt{3}+\sqrt{6}} - \frac{\sqrt{48}}{\sqrt{2}+\sqrt{6}} + \frac{\sqrt{6}}{\sqrt{2}+\sqrt{3}} = \frac{3\sqrt{2}(\sqrt{3}-\sqrt{6})}{(\sqrt{3}+\sqrt{6})(\sqrt{3}-\sqrt{6})} - \frac{4\sqrt{3}(\sqrt{2}-\sqrt{6})}{(\sqrt{2}+\sqrt{6})(\sqrt{2}-\sqrt{6})} + \frac{\sqrt{6}(\sqrt{2}-\sqrt{3})}{(\sqrt{2}+\sqrt{3})(\sqrt{2}-\sqrt{3})}$

$$= \frac{3\sqrt{2}(\sqrt{3}-\sqrt{6})}{(\sqrt{3})^2-(\sqrt{6})^2} - \frac{4\sqrt{3}(\sqrt{2}-\sqrt{6})}{(\sqrt{2})^2-(\sqrt{6})^2} + \frac{\sqrt{6}(\sqrt{2}-\sqrt{3})}{(\sqrt{2})^2-(\sqrt{3})^2}$$

$$= \frac{3\sqrt{2}(\sqrt{3}-\sqrt{6})}{3-6} - \frac{4\sqrt{3}(\sqrt{2}-\sqrt{6})}{2-6} + \frac{\sqrt{6}(\sqrt{2}-\sqrt{3})}{2-3}$$

$$= \frac{3\sqrt{2}(\sqrt{3}-\sqrt{6})}{-3} - \frac{4\sqrt{3}(\sqrt{2}-\sqrt{6})}{-4} + \frac{\sqrt{6}(\sqrt{2}-\sqrt{3})}{-1}$$



মণিপুরৰ শাসনৰত্ন (সংস্কৃত)

DEPARTMENT OF EDUCATION (S)

Government of Manipur

$$\begin{aligned}
 &= \frac{3\sqrt{2}(\sqrt{6}-\sqrt{3})}{3} - \frac{4\sqrt{3}(\sqrt{6}-\sqrt{2})}{4} + \sqrt{6}(\sqrt{3}-\sqrt{2}) \\
 &= \sqrt{2}(\sqrt{6}-\sqrt{3}) - \sqrt{3}(\sqrt{6}-\sqrt{2}) + \sqrt{6}(\sqrt{3}-\sqrt{2}) \\
 &= \sqrt{12} - \sqrt{6} - \sqrt{18} + \sqrt{6} + \sqrt{18} - \sqrt{12} \\
 &= 0
 \end{aligned}$$

(iii) $\frac{1}{\sqrt{5}-\sqrt{3}} - \frac{1}{\sqrt{5}+\sqrt{3}}$

Solution:- $\frac{1}{\sqrt{5}-\sqrt{3}} - \frac{1}{\sqrt{5}+\sqrt{3}} = \frac{(\sqrt{5}+\sqrt{3})-(\sqrt{5}-\sqrt{3})}{(\sqrt{5}-\sqrt{3})(\sqrt{5}+\sqrt{3})}$

$$\begin{aligned}
 &= \frac{\sqrt{5}+\sqrt{3}-\sqrt{5}+\sqrt{3}}{\sqrt{5}^2-\sqrt{3}^2} \\
 &= \frac{2\sqrt{3}}{5-3} \\
 &= \frac{2\sqrt{3}}{2} \\
 &= \sqrt{3}
 \end{aligned}$$

(iv) $\frac{2}{4+3\sqrt{2}} + \frac{7}{3-\sqrt{2}} - \frac{31}{1+4\sqrt{2}}$

Solution:- $\frac{2}{4+3\sqrt{2}} + \frac{7}{3-\sqrt{2}} - \frac{31}{1+4\sqrt{2}} = \frac{2(4-3\sqrt{2})}{(4+3\sqrt{2})(4-3\sqrt{2})} + \frac{7(3+\sqrt{2})}{(3-\sqrt{2})(3+\sqrt{2})} - \frac{31(1-4\sqrt{2})}{(1+4\sqrt{2})(1-4\sqrt{2})}$

$$\begin{aligned}
 &= \frac{2(4-3\sqrt{2})}{4^2-(3\sqrt{2})^2} + \frac{7(3+\sqrt{2})}{3^2-\sqrt{2}^2} - \frac{31(1-4\sqrt{2})}{1^2-(4\sqrt{2})^2} \\
 &= \frac{2(4-3\sqrt{2})}{16-18} + \frac{7(3+\sqrt{2})}{9-2} - \frac{31(1-4\sqrt{2})}{1-32} \\
 &= \frac{2(4-3\sqrt{2})}{-2} + \frac{7(3+\sqrt{2})}{7} - \frac{31(1-4\sqrt{2})}{-31} \\
 &= -(4-3\sqrt{2}) + (3+\sqrt{2}) + (1-4\sqrt{2}) \\
 &= -4+3\sqrt{2}+3+\sqrt{2}+1-4\sqrt{2} \\
 &= 4-4+4\sqrt{2}-4\sqrt{2} \\
 &= 0
 \end{aligned}$$

(v) $\frac{1}{1+\sqrt{2}-\sqrt{3}} - \frac{1}{1+\sqrt{2}+\sqrt{3}}$

Solution:- $\frac{1}{1+\sqrt{2}-\sqrt{3}} - \frac{1}{1+\sqrt{2}+\sqrt{3}} = \frac{\{(1+\sqrt{2})+\sqrt{3}\}-\{(1+\sqrt{2})-\sqrt{3}\}}{\{(1+\sqrt{2})-\sqrt{3}\}\{(1+\sqrt{2})+\sqrt{3}\}}$

$$\begin{aligned}
 &= \frac{1+\sqrt{2}+\sqrt{3}-1-\sqrt{2}+\sqrt{3}}{(1+\sqrt{2})^2-(\sqrt{3})^2} \\
 &= \frac{2\sqrt{3}}{1+2\sqrt{2}+\sqrt{2}^2-3} \\
 &= \frac{2\sqrt{3}}{1+2\sqrt{2}+2-3}
 \end{aligned}$$



সাঁগেৰাংলৈ থাওঁ নক্সালাল (থাম)

DEPARTMENT OF EDUCATION (S)

Government of Manipur

$$= \frac{2\sqrt{3}}{3+2\sqrt{2}-3}$$

$$= \frac{2\sqrt{3}}{2\sqrt{2}}$$

$$= \frac{\sqrt{3}}{\sqrt{2}}$$

$$= \frac{\sqrt{3} \times \sqrt{2}}{\sqrt{2}^2}$$

$$= \frac{\sqrt{6}}{2}$$

(vi) $\frac{11}{1-\sqrt{3}+\sqrt{5}} - \frac{11}{1+\sqrt{3}+\sqrt{5}}$

Solution:- $\frac{11}{1-\sqrt{3}+\sqrt{5}} - \frac{11}{1+\sqrt{3}+\sqrt{5}} = \frac{11(1+\sqrt{3}+\sqrt{5}) - 11(1-\sqrt{3}+\sqrt{5})}{(1-\sqrt{3}+\sqrt{5})(1+\sqrt{3}+\sqrt{5})}$

$$= \frac{11\{(1+\sqrt{3}+\sqrt{5}) - (1-\sqrt{3}+\sqrt{5})\}}{(1+\sqrt{5}-\sqrt{3})(1+\sqrt{5}+\sqrt{3})}$$

$$= \frac{11(1+\sqrt{3}+\sqrt{5}-1+\sqrt{3}-\sqrt{5})}{(1+\sqrt{5})^2 - \sqrt{3}^2}$$

$$= \frac{11 \times 2\sqrt{3}}{1+2\sqrt{5}+\sqrt{5}^2 - 3}$$

$$= \frac{11 \times 2\sqrt{3}}{1+2\sqrt{5}+5-3}$$

$$= \frac{11 \times 2\sqrt{3}}{2\sqrt{5}+3}$$

$$= \frac{11 \times 2\sqrt{3}(2\sqrt{5}-3)}{(2\sqrt{5}+3)(2\sqrt{5}-3)}$$

$$= \frac{11 \times 2(2\sqrt{15}-3\sqrt{3})}{(2\sqrt{5})^2 - 3^2}$$

$$= \frac{11 \times 2(2\sqrt{15}-3\sqrt{3})}{4 \times 5 - 9}$$

$$= \frac{11 \times 2(2\sqrt{15}-3\sqrt{3})}{11}$$

$$= 4\sqrt{15} - 6\sqrt{3}$$

(vii) $3\sqrt{35} + \frac{\sqrt{7}-\sqrt{5}}{\sqrt{7}+\sqrt{5}} - \frac{\sqrt{7}+\sqrt{5}}{\sqrt{7}-\sqrt{5}}$

Solution:- $3\sqrt{35} + \frac{\sqrt{7}-\sqrt{5}}{\sqrt{7}+\sqrt{5}} - \frac{\sqrt{7}+\sqrt{5}}{\sqrt{7}-\sqrt{5}} = 3\sqrt{35} + \frac{(\sqrt{7}-\sqrt{5})(\sqrt{7}-\sqrt{5})}{(\sqrt{7}+\sqrt{5})(\sqrt{7}-\sqrt{5})} - \frac{(\sqrt{7}+\sqrt{5})(\sqrt{7}+\sqrt{5})}{(\sqrt{7}-\sqrt{5})(\sqrt{7}+\sqrt{5})}$

$$= 3\sqrt{35} + \frac{(\sqrt{7}-\sqrt{5})^2}{(\sqrt{7})^2 - (\sqrt{5})^2} - \frac{(\sqrt{7}+\sqrt{5})^2}{(\sqrt{7})^2 - (\sqrt{5})^2}$$

$$= 3\sqrt{35} + \frac{(\sqrt{7})^2 - 2\sqrt{7}\sqrt{5} + (\sqrt{5})^2}{7-5} - \frac{(\sqrt{7})^2 + 2\sqrt{7}\sqrt{5} + (\sqrt{5})^2}{7-5}$$

$$= 3\sqrt{35} + \frac{7-2\sqrt{35}+5}{2} - \frac{7+2\sqrt{35}+5}{2}$$



$$\begin{aligned}
 &= 3\sqrt{35} + \frac{12-2\sqrt{35}}{2} - \frac{12+2\sqrt{35}}{2} \\
 &= 3\sqrt{35} + \frac{2(6-\sqrt{35})}{2} - \frac{2(6+\sqrt{35})}{2} \\
 &= 3\sqrt{35} + (6 - \sqrt{35}) - (6 + \sqrt{35}) \\
 &= 3\sqrt{35} + 6 - \sqrt{35} - 6 - \sqrt{35} \\
 &= 3\sqrt{35} - 2\sqrt{35} \\
 &= \sqrt{35}
 \end{aligned}$$

11. Show that the following are rational.

(i) $\frac{(\sqrt{3}-\sqrt{2})(5+2\sqrt{6})}{\sqrt{3}+\sqrt{2}}$

Solution:- $\frac{(\sqrt{3}-\sqrt{2})(5+2\sqrt{6})}{\sqrt{3}+\sqrt{2}} = \frac{(\sqrt{3}-\sqrt{2})(5+2\sqrt{6})(\sqrt{3}-\sqrt{2})}{(\sqrt{3}+\sqrt{2})(\sqrt{3}-\sqrt{2})}$

$$\begin{aligned}
 &= \frac{(\sqrt{3}-\sqrt{2})^2(5+2\sqrt{6})}{(\sqrt{3})^2 - (\sqrt{2})^2} \\
 &= \frac{\{(\sqrt{3})^2 - 2\sqrt{3}\sqrt{2} + (\sqrt{2})^2\}(5+2\sqrt{6})}{3-2} \\
 &= \frac{(3-2\sqrt{6}+2)(5+2\sqrt{6})}{1} \\
 &= (5-2\sqrt{6})(5+2\sqrt{6}) \\
 &= 5^2 - (2\sqrt{6})^2 \\
 &= 25 - 4 \times 6 \\
 &= 25 - 24 \\
 &= 1 \text{ which is a rational.}
 \end{aligned}$$

(ii) $\frac{5-\sqrt{5}}{3+\sqrt{5}} + 2\sqrt{5}$

Solution:- $\frac{5-\sqrt{5}}{3+\sqrt{5}} + 2\sqrt{5} = \frac{(5-\sqrt{5})(3-\sqrt{5})}{(3+\sqrt{5})(3-\sqrt{5})} + 2\sqrt{5}$

$$\begin{aligned}
 &= \frac{15-5\sqrt{5}-3\sqrt{5}+5}{3^2-(\sqrt{5})^2} + 2\sqrt{5} \\
 &= \frac{20-8\sqrt{5}}{9-5} + 2\sqrt{5} \\
 &= \frac{4(5-2\sqrt{5})}{4} + 2\sqrt{5} \\
 &= 5 - 2\sqrt{5} + 2\sqrt{5} \\
 &= 5 \text{ which is a rational.}
 \end{aligned}$$



(iii) $\frac{1}{1+\sqrt{2}} + \frac{1}{\sqrt{2}+\sqrt{3}} + \frac{1}{\sqrt{3}+\sqrt{4}}$

Solution:- $\frac{1}{1+\sqrt{2}} + \frac{1}{\sqrt{2}+\sqrt{3}} + \frac{1}{\sqrt{3}+\sqrt{4}} = \frac{1-\sqrt{2}}{(1+\sqrt{2})(1-\sqrt{2})} + \frac{\sqrt{2}-\sqrt{3}}{(\sqrt{2}+\sqrt{3})(\sqrt{2}-\sqrt{3})} + \frac{\sqrt{3}-\sqrt{4}}{(\sqrt{3}+\sqrt{4})(\sqrt{3}-\sqrt{4})}$

$$= \frac{1-\sqrt{2}}{1^2-\sqrt{2}^2} + \frac{\sqrt{2}-\sqrt{3}}{\sqrt{2}^2-\sqrt{3}^2} + \frac{\sqrt{3}-\sqrt{4}}{\sqrt{3}^2-\sqrt{4}^2}$$

$$= \frac{1-\sqrt{2}}{1-2} + \frac{\sqrt{2}-\sqrt{3}}{2-3} + \frac{\sqrt{3}-\sqrt{4}}{3-4}$$

$$= \frac{1-\sqrt{2}}{-1} + \frac{\sqrt{2}-\sqrt{3}}{-1} + \frac{\sqrt{3}-\sqrt{4}}{-1}$$

$$= -(1-\sqrt{2}) - (\sqrt{2}-\sqrt{3}) - (\sqrt{3}-\sqrt{4})$$

$$= -1 + \sqrt{2} - \sqrt{2} + \sqrt{3} - \sqrt{3} + \sqrt{4}$$

$$= -1 + \sqrt{2}^2$$

$$= -1 + 2$$

$$= 1 \text{ which is a rational.}$$

(iv) $x^2 - xy + y^2$ where $x = \frac{\sqrt{2}-1}{\sqrt{2}+1}$ and $y = \frac{\sqrt{2}+1}{\sqrt{2}-1}$

Solution:- $x = \frac{\sqrt{2}-1}{\sqrt{2}+1}$

$$= \frac{(\sqrt{2}-1)(\sqrt{2}-1)}{(\sqrt{2}+1)(\sqrt{2}-1)}$$

$$= \frac{(\sqrt{2}-1)^2}{(\sqrt{2})^2 - 1^2}$$

$$= \frac{(\sqrt{2})^2 - 2\sqrt{2} + 1^2}{2 - 1}$$

$$= \frac{2 - 2\sqrt{2} + 1}{1}$$

$$= 3 - 2\sqrt{2}$$

$y = \frac{\sqrt{2}+1}{\sqrt{2}-1}$

$$= \frac{(\sqrt{2}+1)(\sqrt{2}+1)}{(\sqrt{2}-1)(\sqrt{2}+1)}$$

$$= \frac{(\sqrt{2}+1)^2}{(\sqrt{2})^2 - 1^2}$$

$$= \frac{(\sqrt{2})^2 + 2\sqrt{2} + 1^2}{2 - 1}$$


$$= \frac{2 + 2\sqrt{2} + 1}{1}$$

$$= 3 + 2\sqrt{2}$$



মণিপুরৰ শ্বৰে সৰ্বশ্বৰ (স)
DEPARTMENT OF EDUCATION (S)
Government of Manipur

$$\begin{aligned}x^2 - xy + y^2 &= (3 - 2\sqrt{2})^2 - (3 - 2\sqrt{2})(3 + 2\sqrt{2}) + (3 + 2\sqrt{2})^2 \\&= 3^2 - 2 \cdot 3 \cdot 2\sqrt{2} + (2\sqrt{2})^2 - \{3^2 - (2\sqrt{2})^2\} + 3^2 + 2 \cdot 3 \cdot 2\sqrt{2} + (2\sqrt{2})^2 \\&= (9 - 12\sqrt{2} + 8) - (9 - 8) + (9 + 12\sqrt{2} + 8) \\&= 17 - 12\sqrt{2} - 1 + 17 + 12\sqrt{2} \\&= 34 - 1 \\&= 33 \text{ which is a rational.}\end{aligned}$$



মণিপুরৰ শ্বৰে সৰ্বশ্বৰ (স)
DEPARTMENT OF EDUCATION (S)
Government of Manipur